

Name: _____

Score: ____ /20

I. Write the letter of the best answer on the space provided. (5 pts.)








- ____ 1. Which of the following is common to whale, shark, and clown fish?
a. color b. movement c. size
- ____ 2. Which body part is present to rabbit and kangaroo?
a. beak b. hind legs c. wings
- ____ 3. Which of the following pair of animals have fins and tail?
a. clown fish and turtle
b. duck and chicken
c. frog and crocodile
- ____ 4. Which body part is for snail and turtle?
a. beak b. horn c. hard shell
- ____ 5. Which of the following will help ostrich run fast?
a. heavy body b. long legs c. long neck

II. Color the animals according to their movement. Refer to the legend below. (10 pts.)










BLUE – swimming
BROWN – crawling

RED – walking or running
GREEN – swing

YELLOW – flying



III. Match the body part in column A with the animal in column B. Write the letter of the best answer on the space provided. (5 pts.)



END